






Which rests do you see on this page? half rests, and quarter rests.





MUSICAL MATH

Complete these musical equations. Remember to count the notes as well as the rests.




1)  +  = 2

7)  +  +  = 9




2)  +  = 3




8)  +  = 3




3)  +  = 5



9)  +  +  = 10




4)  +  = 5

10)  +  +  = 5

5)  +  +  = 7

11)  +  +  = 8

6)  +  = 3

12)  +  +  = 3