





















MUSICAL MATH










Write the number of beats below each note and rest:










									
<u>1/2</u>	<u>1/2</u>	<u>1</u>	<u>1</u>	<u>1</u>	<u>1 1/2</u>	<u>2</u>	<u>2</u>	<u>3</u>	<u>4</u>




The notes and rests in each cube below should add up to 16 beats. Draw the missing note to complete each cube:











		
		
		

Name each note and rest:

									
EIGHTH NOTE	EIGHTH REST	QUARTER NOTE	QUARTER RES	DOTTED QUARTER NOTE	HALF NOTE	HALF REST	DOTTED HALF NOTE	WHOLE NOTE	WHOLE REST